



**Cambridge International Examinations**  
Cambridge International General Certificate of Secondary Education

CANDIDATE  
NAME

CENTRE  
NUMBER

--	--	--	--	--

CANDIDATE  
NUMBER

--	--	--	--



**CAMBRIDGE INTERNATIONAL MATHEMATICS**

**0607/22**

Paper 2 (Extended)

**October/November 2017**

**45 minutes**

Candidates answer on the Question Paper.

Additional Materials: Geometrical Instruments

**READ THESE INSTRUCTIONS FIRST**

Write your Centre number, candidate number and name on all the work you hand in.

Write in dark blue or black pen.

Do not use staples, paper clips, glue or correction fluid.

You may use an HB pencil for any diagrams or graphs.

**DO NOT WRITE IN ANY BARCODES.**

Answer **all** the questions.

**CALCULATORS MUST NOT BE USED IN THIS PAPER.**

All answers should be given in their simplest form.

You must show all the relevant working to gain full marks and you will be given marks for correct methods even if your answer is incorrect.

The number of marks is given in brackets [ ] at the end of each question or part question.

The total number of marks for this paper is 40.

This document consists of **8** printed pages.

## Formula List

For the equation  $ax^2 + bx + c = 0$   $x = \frac{-b \pm \sqrt{b^2 - 4ac}}{2a}$

Curved surface area,  $A$ , of cylinder of radius  $r$ , height  $h$ .  $A = 2\pi rh$

Curved surface area,  $A$ , of cone of radius  $r$ , sloping edge  $l$ .  $A = \pi rl$

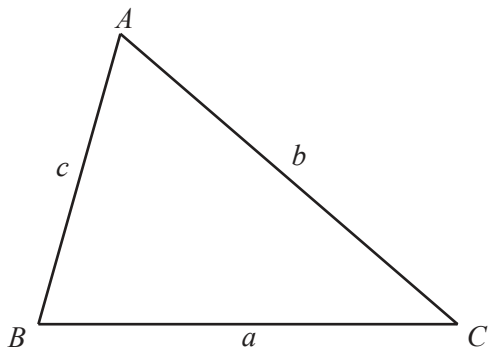
Curved surface area,  $A$ , of sphere of radius  $r$ .  $A = 4\pi r^2$

Volume,  $V$ , of pyramid, base area  $A$ , height  $h$ .  $V = \frac{1}{3}Ah$

Volume,  $V$ , of cylinder of radius  $r$ , height  $h$ .  $V = \pi r^2 h$

Volume,  $V$ , of cone of radius  $r$ , height  $h$ .  $V = \frac{1}{3}\pi r^2 h$

Volume,  $V$ , of sphere of radius  $r$ .  $V = \frac{4}{3}\pi r^3$



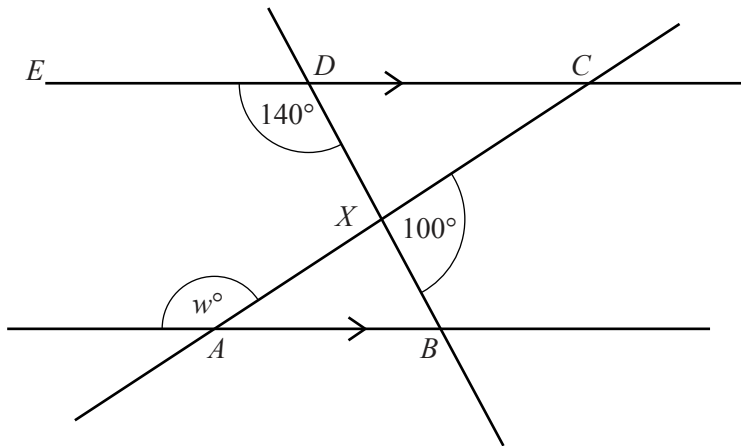
$$\frac{a}{\sin A} = \frac{b}{\sin B} = \frac{c}{\sin C}$$

$$a^2 = b^2 + c^2 - 2bc \cos A$$

$$\text{Area} = \frac{1}{2}bc \sin A$$

Answer **all** the questions.

1



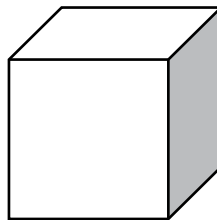
NOT TO SCALE

The diagram shows two parallel lines with two straight lines crossing.

Find the value of  $w$ .

$w = \dots\dots\dots$  [2]

2



The volume of a cube is  $27 \text{ cm}^3$ .

Find the total surface area.

$\dots\dots\dots \text{ cm}^2$  [2]

- 3 Find the highest common factor (HCF) of 30, 48 and 66.

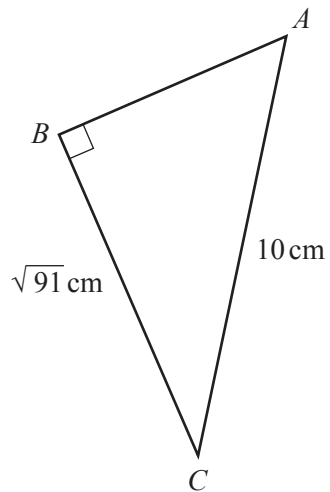
..... [1]

4  $f(x) = 2x - 3$

Find the range of  $f(x)$  for the domain  $\{0, 1, 2\}$ .

{.....} [1]

5



NOT TO  
SCALE

Work out the length of  $AB$ .

$AB =$  ..... cm [3]

6  $y = 2x^2 - 1$

Rearrange the formula to write  $x$  in terms of  $y$ .

$x = \dots\dots\dots$  [3]

7 (a) Change 20 m/s into km/h.

$\dots\dots\dots$  km/h [2]

(b) A train travels at 20 m/s for 45 minutes.

Work out the distance travelled.  
Give your answer in kilometres.

$\dots\dots\dots$  km [2]

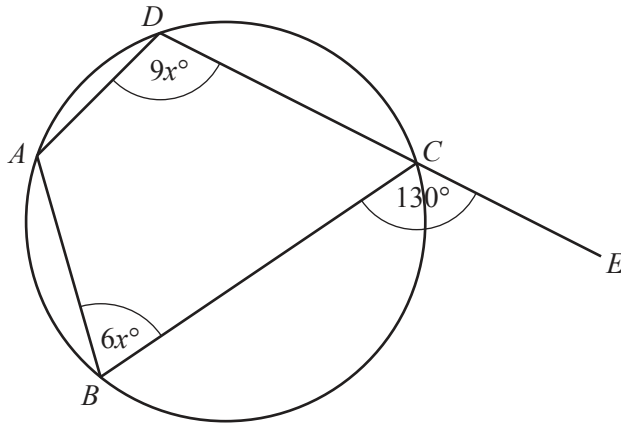
8 Work out  $(3.2 \times 10^{20}) + (2.3 \times 10^{21})$ , giving your answer in standard form.

$\dots\dots\dots$  [2]

9 Find the value of  $(0.1)^2$ .

$\dots\dots\dots$  [1]

10

NOT TO  
SCALE

$ABCD$  is a cyclic quadrilateral.

$DC$  is extended to  $E$ .

Angle  $BCE = 130^\circ$ , angle  $ABC = 6x^\circ$  and angle  $ADC = 9x^\circ$ .

Find the value of

(a) angle  $BAD$ ,

Angle  $BAD = \dots\dots\dots$  [1]

(b) angle  $ABC$ .

Angle  $ABC = \dots\dots\dots$  [2]

11 Simplify.

(a)  $\frac{12x^{12}}{4x^4}$

$\dots\dots\dots$  [2]

(b)  $(16x^{16})^{\frac{1}{4}}$

$\dots\dots\dots$  [2]

12  $y$  is proportional to  $\frac{1}{\sqrt{x}}$ .

When  $x = 4$ ,  $y = 2$ .

Find  $y$  when  $x = 64$ .

$y =$  ..... [3]

13 (a) Simplify  $\sqrt{18} + \sqrt{72}$ .

..... [2]

(b) Rationalise the denominator.

$$\frac{1}{\sqrt{5} + 2}$$

..... [2]

14 Simplify.

$$\frac{x^2 - x}{x^2 - 1}$$

..... [3]

Questions 15 and 16 are printed on the next page.

15 (a)  $\log k = 2\log 3 - 5\log 2$

Find the value of  $k$ .

$$k = \dots\dots\dots [2]$$

(b)  $\log_2 p = -1$

Find the value of  $p$ .

$$p = \dots\dots\dots [1]$$

16  $\theta$  is an acute angle and  $\tan \theta = \sqrt{3}$ .

Write down the value of  $\theta$ .

$$\theta = \dots\dots\dots [1]$$

---

Permission to reproduce items where third-party owned material protected by copyright is included has been sought and cleared where possible. Every reasonable effort has been made by the publisher (UCLES) to trace copyright holders, but if any items requiring clearance have unwittingly been included, the publisher will be pleased to make amends at the earliest possible opportunity.

To avoid the issue of disclosure of answer-related information to candidates, all copyright acknowledgements are reproduced online in the Cambridge International Examinations Copyright Acknowledgements Booklet. This is produced for each series of examinations and is freely available to download at [www.cie.org.uk](http://www.cie.org.uk) after the live examination series.

Cambridge International Examinations is part of the Cambridge Assessment Group. Cambridge Assessment is the brand name of University of Cambridge Local Examinations Syndicate (UCLES), which is itself a department of the University of Cambridge.